









Sadie's Counting Activity

Help Sadie out by counting the number of items in each group! Circle the correct number.

 <p>1 2 3 4 5 6 7 8 9</p>	 <p>1 2 3 4 5 6 7 8 9</p>
 <p>1 2 3 4 5 6 7 8 9</p>	 <p>1 2 3 4 5 6 7 8 9</p>
 <p>1 2 3 4 5 6 7 8 9</p>	 <p>1 2 3 4 5 6 7 8 9</p>